



# PRIMARY SCHOOLS



# MATHS ACTIVITY PACK

**NAME**



# ADRENALINE MATHS CHALLENGE

What is the total of Adam Smith's DEF stat and Andrew Surmans' ATT stat?

What is the difference between Artur Boruc's DEF Stat and Joshua Kings DEF Stat?

What is the total of Callum Wilson's ATT stat and Chris Mepham's ATT stat?

Which duo has a higher total- Callum Wilson and Joshua King or Andrew Surman and Artur Boruc?



# TIME QUIZ

A football match lasts for 90 minutes. What is this in hours and minutes?

Junior Stanislas came onto the pitch after 51 minutes and then scored 22 minutes later. How many minutes into the match does he score?

AFC Bournemouth scored their goal in the 14<sup>th</sup> minute. They then score another goal on the 52<sup>nd</sup> minute. How much playing time is there between the two goals?

The AFC Bournemouth match kicked off at 7.30pm. The First half lasts for 48 minutes. At what time will the first half end?

AFC Bournemouth have played for 94 minutes in each of their last three matches. How many minutes is this in total?

Ryan Fraser took his first corner of the match on the 12<sup>th</sup> minute and his third corner of the match on 78 minutes. His second corner was 41 minutes later than his first corner. What minute was the second corner taken?






# WOMEN'S TEAM STATS




**Katie Kingshott**

Apps – 16  
Goals – 5




**Rosie Eden**

Apps – 19  
Goals – 11



**Rebecca Miles**

Apps – 20  
Goals – 24



**Hannah Bennett**

Apps – 19  
Goals – 9



# WOMEN'S TEAM STATS

If I multiplied Hannah Bennett's goals tally by Katie Kingshott's goals tally, how many goals would I have scored so far this season?

How many goals would I have scored if I combined Rebecca Miles' goal tally, Hannah Bennett's goal tally and Rosie Eden's goal tally?

What is the difference between the combination of goals scored by Hannah Bennett/ Rosie Eden and Katie Kingshott's and Rebecca Miles?

How many appearances would I have made if I combine the appearances of all players mentioned?

What is the difference between the total number of goals scored by Rosie Eden and Rebecca Miles (\_\_\_\_) and the number of goals scored by Katie Kingshott multiplied by the goals scored by Hannah Bennett (\_\_\_\_) ?



# FOOTBALL TIME



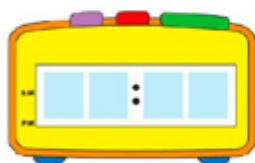
Callum Wilson's clock displays this time.

What would this time be on a 12-hour digital clock?



Steve Cook's clock displays this time.

What time this be on a 12-hour digital clock?



Aaron Ramsdale's clock displays this time.

What time would this be on a 24-hour digital clock?



# FOOTBALL TIME

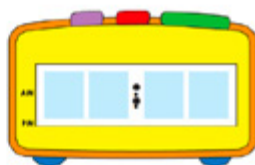


The AFC Bournemouth match kicks off at 7.45pm. How long is it until kick off?

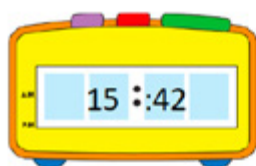


The current time is 7:10pm.

Can you draw this on the clock face?



Can you convert the analogue time into a 12-hour digital clock time?



Can you convert the digital clock time into the time on an analogue clock?